



Rakaat as Fractions

The fraction of the salaats are written to the right.
Circle the amount of each salaat that has been prayed.
Each picture of a person making salat equals one rakaat.



$\frac{1}{2}$ Of Fajr



$\frac{1}{4}$ of Thuhr






$\frac{4}{4}$ of Asr



$\frac{2}{3}$ of Maghrib



$\frac{2}{2}$ of Fajr



$\frac{2}{4}$ of Ishaa



$\frac{1}{3}$ of Maghrib



$\frac{3}{4}$ of Thuhr



$\frac{2}{4}$ of Fajr