



# Time to Pray

Fill in the times on the clocks below for the salah times today.


Use these times to answer the word problems below.




الصَّلَاةُ الْعِشَاءُ




الصَّلَاةُ الْمَغْرِبُ



الصَّلَاةُ الْعَصْرُ



الصَّلَاةُ الظُّهْرُ



الصَّلَاةُ الْفَجْرُ

1. Aisha made Fajr on time. How many hours is it between Fajr and Thuhr today?

\_\_\_\_\_

2. Ruqaiya made Thuhr. Asr comes in next. Does she have time to watch a two-hour movie before Asr prayer?

\_\_\_\_\_

3. If it is twelve o'clock, Thuhr coming in at twelve-thirty, does Ruqaiya have enough time for a snack before she prays?

\_\_\_\_\_

4. How much time is there between Fajr and Asr?

\_\_\_\_\_

5. It takes four hours to go to the library, look at books, and come home. If it is ten o'clock when they leave, will the family have to make salah outside?

\_\_\_\_\_

6. How much time elapses between Maghrib and Isha prayers?

7. If Aisha makes Thuhr salah at three o'clock, how much time between that and Asr?

\_\_\_\_\_